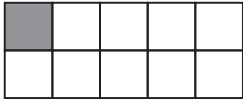


# ARBETSBLAD 61

## Hur stor andel?

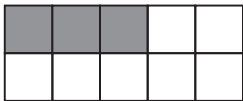
Hur stor andel är skuggad? Svara i bråkform, decimalform och procentform.

1



— = — = —

2




— = — = —

3




— = — = —

4




— = — = —

5



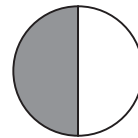
— = — = —

6



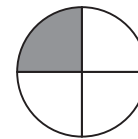
— = — = —

7



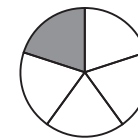
— = — = —

8




— = — = —

9



— = — = —

10



— = — = —

## ARBETSBLAD 61 - FACIT

---

### Hur stor andel?

**1**  $\frac{1}{10} = 0,1 = 10\%$

**2**  $\frac{3}{10} = 0,3 = 30\%$

**3**  $\frac{7}{10} = 0,7 = 70\%$

**4**  $\frac{1}{100} = 0,01 = 1\%$

**5**  $\frac{9}{100} = 0,09 = 9\%$

**6**  $\frac{29}{100} = 0,29 = 29\%$

**7**  $\frac{1}{2} = 0,5 = 50\%$

**8**  $\frac{1}{4} = 0,25 = 25\%$

**9**  $\frac{1}{5} = 0,2 = 20\%$

**10**  $\frac{42}{100} = 0,42 = 42\%$