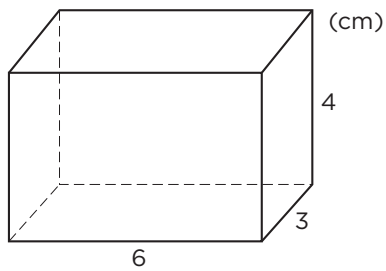


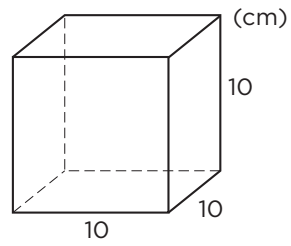
ARBETSBLAD 50

Hur stor är volymen? (I)

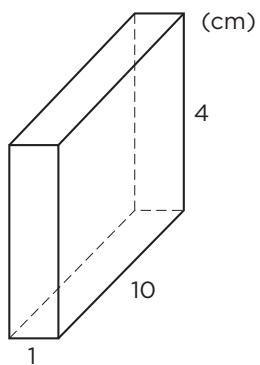
1 a)



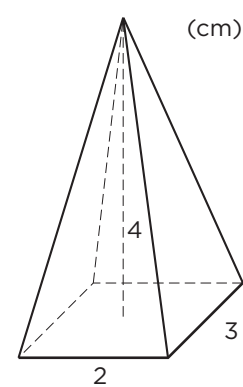
b)



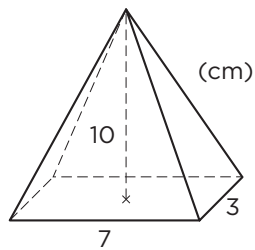
2 a)



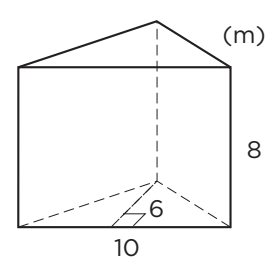
b)



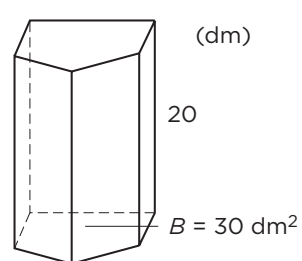
3 a)



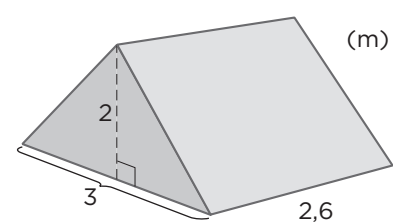
b)



4 a)



b)



ARBETSBLAD 50 - FACIT

Hur stor är volymen? (I)

1 a) 72 cm^3
b) $1\,000 \text{ cm}^3$

2 a) 40 cm^3
b) 8 cm^3

3 a) 70 cm^3
b) 240 m^3

4 a) 600 dm^3
b) $7,8 \text{ m}^3$