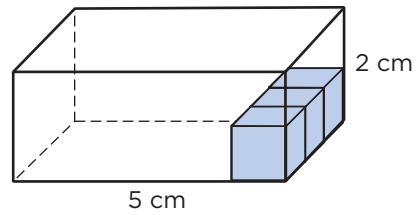


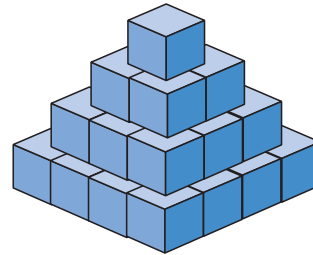
ARBETSBLAD 54

Volym

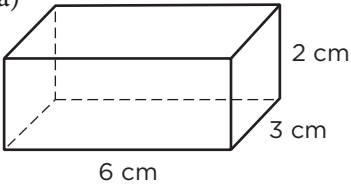
- 1 Hur stor volym har lådan om varje kub har volymen 1 cm^3 ? _____

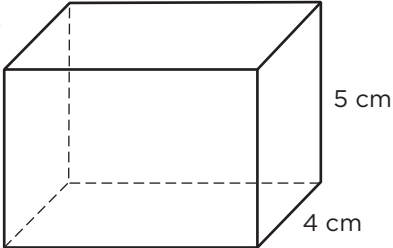


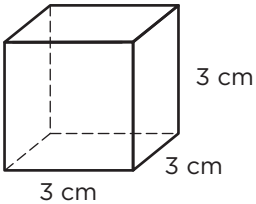
- 2 Hur stor är volymen om varje kub har volymen 1 cm^3 ? _____

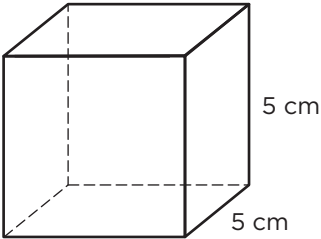


Hur stor är volymen?

- 3 a)  _____


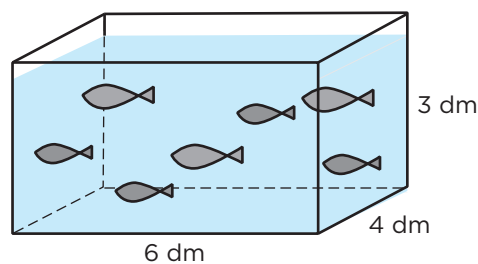
- b)  _____

- 4 a)  _____

- b)  _____

- 5 Vilken volym har akvariet?
Svara i liter.

$1 \text{ dm}^3 = 1 \text{ liter}$



ARBETSBLAD 54 – FACIT

Volym

1 30 cm³

2 30 cm³

3 a) 36 cm³
b) 140 cm³

4 a) 27 cm³
b) 125 cm³

5 72 liter