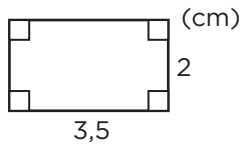


ARBETSBLAD 51


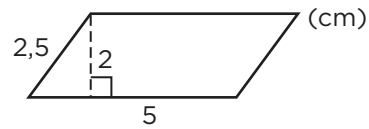
Omkrets och area (I)

Beräkna omkrets och area.


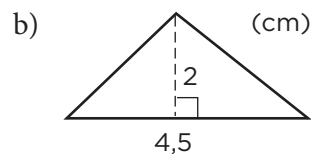
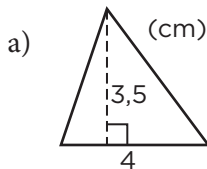
1 a)




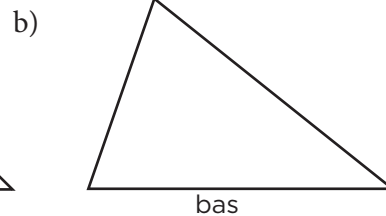
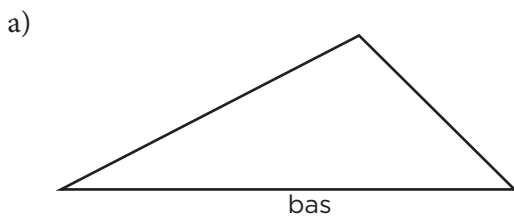
b)



2 Beräkna arean av trianglarna.



3 Dra höjden mot den sida som kallas bas. Mät i hela och halva centimeter och beräkna trianglarnas area.



ARBETSBLAD 51

Omkrets och area (I)

- 1** a) O : 11 cm
A: 7 cm^2
b) O : 15 cm
A: 10 cm^2
- 2** a) 7 cm^2
b) $4,5 \text{ cm}^2$
- 3** a) 6 cm^2
b) 5 cm^2